




Cupcake Addition



Name _____

Use the cupcakes to help solve the problems.



$1 + 3 = \underline{\hspace{2cm}}$

$2 + 1 = \underline{\hspace{2cm}}$

$1 + 4 = \underline{\hspace{2cm}}$

$3 + 3 = \underline{\hspace{2cm}}$

$2 + 8 = \underline{\hspace{2cm}}$


$2 + 4 = \underline{\hspace{2cm}}$

$3 + 2 = \underline{\hspace{2cm}}$


$5 + 3 = \underline{\hspace{2cm}}$

$6 + 4 = \underline{\hspace{2cm}}$


$4 + 5 = \underline{\hspace{2cm}}$



Fill in the missing numbers.





Name: _____





Ten Frames


Color the ten frames to match the number on the snow cone.






















Name _____

Plant a Tree

Count and connect.
Begin at the star.



13

38

15 14 37 36 40 39

11

10 9 17 16 35 34 42 41

8 7 19 18 33 32 44 43

6 5 21 20 31 30 46 45

4 3 23 22 48 47


27

1 2 24 25 26 49 50



Teacher: See "Crayon Resist" and "Holiday Mood" on page 1 for suggested activities.

Name: _____



Fun In The Sun

1. $6 + 9 =$ _____

9. $2 + 9 =$ _____

2. $7 + 4 =$ _____

10. $5 + 7 =$ _____

3. $5 + 8 =$ _____

11. $6 + 8 =$ _____

4. $6 + 4 =$ _____

12. $3 + 7 =$ _____

5. $4 + 3 =$ _____

13. $7 + 2 =$ _____

6. $5 + 6 =$ _____





14. $8 + 6 =$ _____

7. $3 + 9 =$ _____

15. $9 + 3 =$ _____

8. $4 + 9 =$ _____

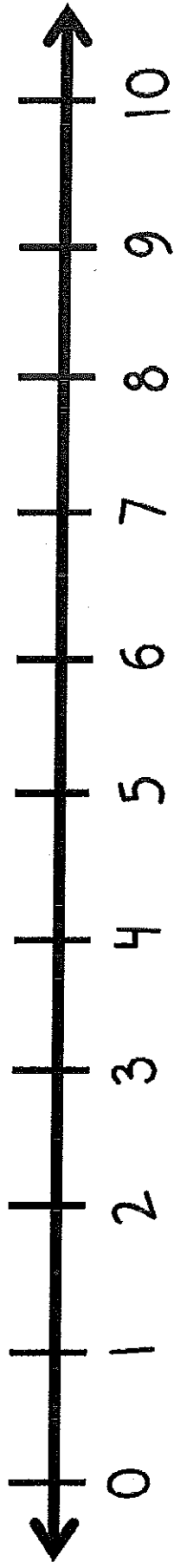
16. $3 + 8 =$ _____



Name _____

Kindergartenpals1@blogspot.com

Let's Add!



$$3 + 3 = \underline{\quad}$$

$$6 + 3 = \underline{\quad}$$

$$5 + 3 = \underline{\quad}$$

$$5 + 5 = \underline{\quad}$$

$$2 + 1 = \underline{\quad}$$

$$2 + 6 = \underline{\quad}$$

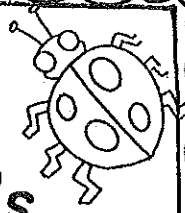
$$6 + 4 = \underline{\quad}$$

$$1 + 3 = \underline{\quad}$$

$$1 + 6 = \underline{\quad}$$

$$4 + 3 = \underline{\quad}$$

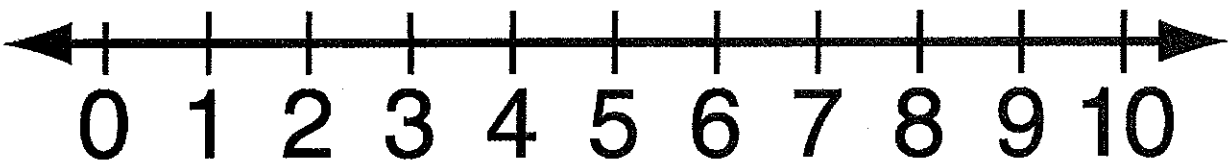
Tad's Bug Jar



Tad put 5 ladybugs in his bug Jar. Tad's sister put 3 more ladybugs in Tad's jar. How many bugs does Tad have in all?

My Picture:

My Number Line:




My Equation:

$$\underline{\quad} + \underline{\quad} = \underline{\quad}$$

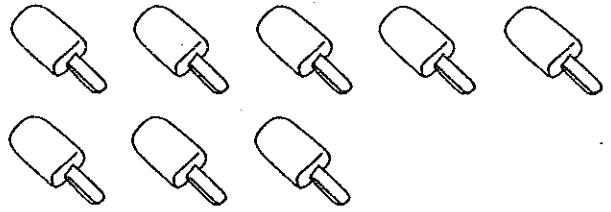
My Answer:

 bugs


Complete the subtraction sentence. Name _____




$$\underline{6} - \underline{2} = \underline{4}$$




$$\underline{5} - \underline{3} = \underline{\quad}$$



$$\underline{10} - \underline{5} = \underline{\quad}$$



$$\underline{8} - \underline{3} = \underline{\quad}$$



$$\underline{7} - \underline{4} = \underline{\quad}$$



$$\underline{4} - \underline{1} = \underline{\quad}$$

Name _____ Date _____

Diggin' For Bones



Directions: Use the bone picture cards to solve the addition problems.

1. $4 + 3 =$ _____

2. $6 + 3 =$ _____

3. $4 + 1 =$ _____

4. $6 + 4 =$ _____

5. $2 + 3 =$ _____

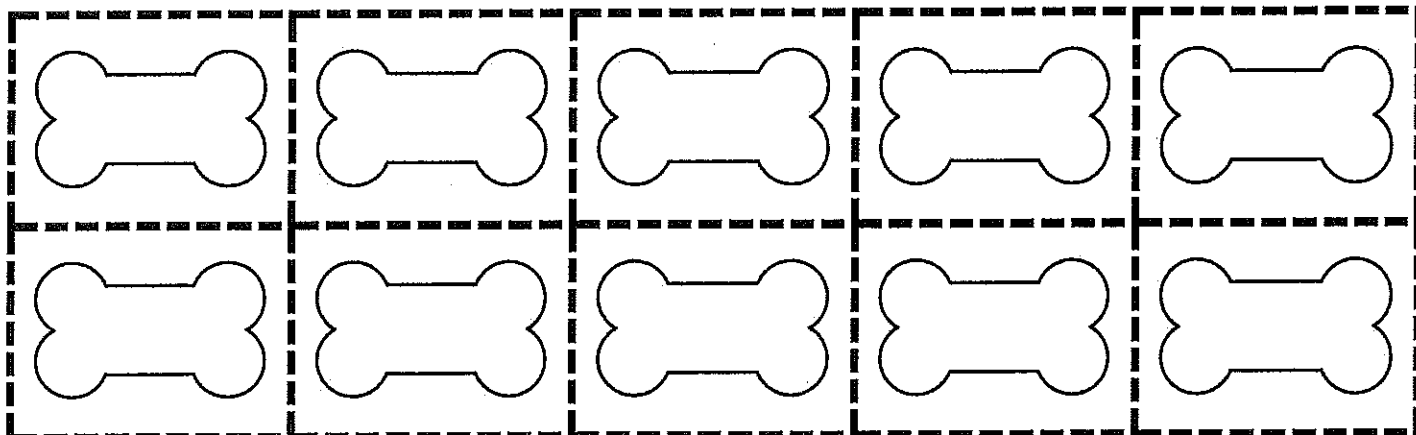
6. $2 + 0 =$ _____

7. $6 + 1 =$ _____

8. $7 + 2 =$ _____

9. $5 + 5 =$ _____

10. $9 + 1 =$ _____



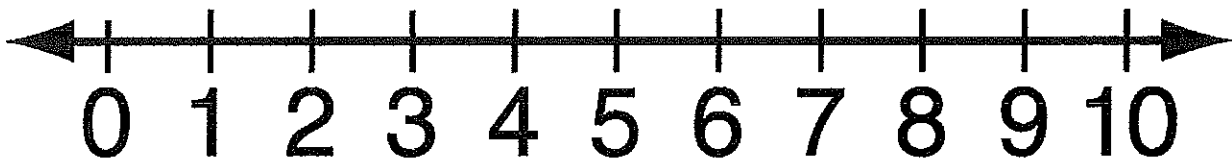
Frog Splash



One sunny day 4 frogs jumped in the pond. Later that day 2 more frogs jumped into the pond. How many frogs are in the pond all together?

My Picture:

My Number Line:



My Equation:


_____ + _____ = _____

My Answer:

_____ frogs

Cupcake Addition

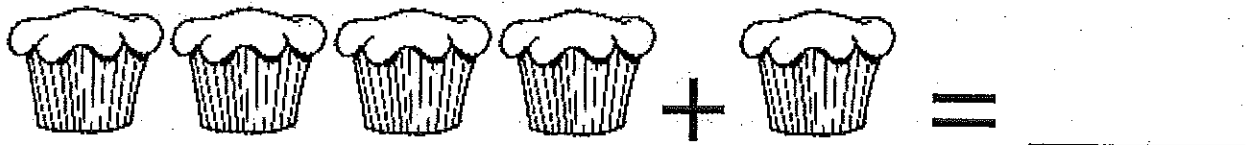
Add the cupcakes and write the answer on the line.



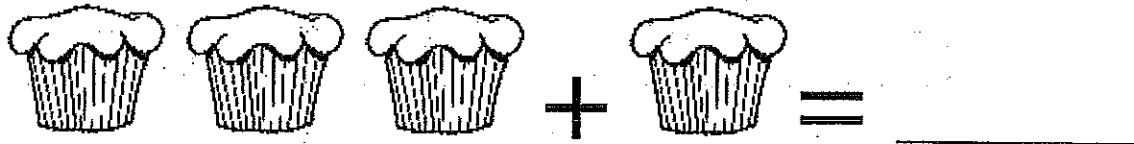
$$2 + 1 = \underline{\quad}$$



$$2 + 2 = \underline{\quad}$$




$$4 + 1 = \underline{\quad}$$



$$3 + 1 = \underline{\quad}$$



$$1 + 1 = \underline{\quad}$$



$$3 + 2 = \underline{\quad}$$

Draw the missing cupcakes.



$$1 + \quad = 3$$